

Name _____



A large rectangular area containing 20 simple shapes, each with a subtraction problem written inside. The shapes and their problems are:


- Circle: $10-6$
- Triangle: $7-0$
- Hexagon: $6-1$
- Rectangle: $9-5$
- Circle: $7-1$
- Rectangle: $10-3$
- Triangle: $9-2$
- Hexagon: $7-2$
- Circle: $8-2$
- Hexagon: $8-3$
- Triangle: $8-4$
- Rectangle: $9-3$
- Rectangle: $7-3$
- Circle: $6-2$
- Triangle: $9-4$
- Rectangle: $5-1$
- Hexagon: $10-4$
- Hexagon: $8-0$
- Circle: $10-5$



Color Code
4—yellow
5—orange
6—blue
7—green

SHORT "E" WORDS


Answer the riddles. Use one word from the short "e" list.
Write the word on the line.



- tent
- sled
- hen
- pen
- cent
- bell
- belt
- bed
- nest
- leg
- desk
- ten

1. You ride on me in winter. _____
2. Write with me. _____
3. Sleep in me outdoors. _____
4. I can ring. _____
5. Hop on me. _____
6. I come after nine. _____
7. I lay eggs. _____
8. Put papers on me. _____
9. I hold up your pants. _____
10. Dream on me. _____
11. Ten of me make a dime. _____
12. Baby birds grow in me. _____

My name is Fred. Does that mean that I'm a short "e" word?



Short Vowel e (II)

Name _____

Date _____

The word **egg** has the short **e** sound.

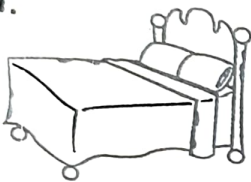


egg

Say the name of each picture.

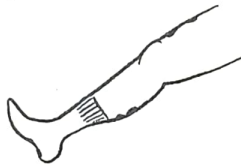
Circle the word that names the picture.

1.



bid bed

2.



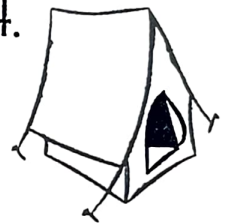
leg lag

3.



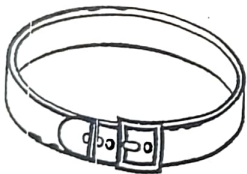
ball bell

4.



tent tant

5.



balt belt

6.



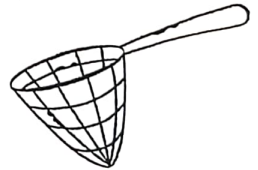
well will

7.



twelve twulve

8.



nat net

9.



pun pen

10.



nast nest

11.



desk duck

12.



pat pet

13.



driss dress

14.



man men

15.



jat jet

16.



web wib

Name _____

An Apple for You

Add.

A.
$$\begin{array}{r} 30 \\ + 10 \\ \hline \end{array}$$


$$\begin{array}{r} 20 \\ + 40 \\ \hline \end{array}$$

$$\begin{array}{r} 60 \\ + 10 \\ \hline \end{array}$$

B.
$$\begin{array}{r} 20 \\ + 20 \\ \hline \end{array}$$

$$\begin{array}{r} 30 \\ + 40 \\ \hline \end{array}$$

$$\begin{array}{r} 50 \\ + 10 \\ \hline \end{array}$$



C.
$$\begin{array}{r} 50 \\ + 20 \\ \hline \end{array}$$

$$\begin{array}{r} 10 \\ + 40 \\ \hline \end{array}$$

$$\begin{array}{r} 10 \\ + 10 \\ \hline \end{array}$$

$$\begin{array}{r} 20 \\ + 30 \\ \hline \end{array}$$

$$\begin{array}{r} 70 \\ + 10 \\ \hline \end{array}$$

$$\begin{array}{r} 20 \\ + 50 \\ \hline \end{array}$$

D.
$$\begin{array}{r} 20 \\ + 10 \\ \hline \end{array}$$

$$\begin{array}{r} 10 \\ + 80 \\ \hline \end{array}$$

$$\begin{array}{r} 60 \\ + 20 \\ \hline \end{array}$$

$$\begin{array}{r} 30 \\ + 30 \\ \hline \end{array}$$

$$\begin{array}{r} 50 \\ + 30 \\ \hline \end{array}$$

$$\begin{array}{r} 40 \\ + 40 \\ \hline \end{array}$$

E.
$$\begin{array}{r} 40 \\ + 50 \\ \hline \end{array}$$

$$\begin{array}{r} 70 \\ + 20 \\ \hline \end{array}$$

$$\begin{array}{r} 50 \\ + 50 \\ \hline \end{array}$$

$$\begin{array}{r} 20 \\ + 90 \\ \hline \end{array}$$

$$\begin{array}{r} 30 \\ + 70 \\ \hline \end{array}$$

$$\begin{array}{r} 90 \\ + 10 \\ \hline \end{array}$$

F.
$$\begin{array}{r} 80 \\ + 40 \\ \hline \end{array}$$

$$\begin{array}{r} 20 \\ + 80 \\ \hline \end{array}$$

$$\begin{array}{r} 80 \\ + 30 \\ \hline \end{array}$$

$$\begin{array}{r} 40 \\ + 60 \\ \hline \end{array}$$

$$\begin{array}{r} 60 \\ + 50 \\ \hline \end{array}$$

$$\begin{array}{r} 70 \\ + 40 \\ \hline \end{array}$$