


Name _____

Enrichment

6-5


Student Book pp. 127-128




7 o'clock




11 o'clock




3 o'clock



6 o'clock



8 o'clock



12 o'clock

Draw the hour hand to show the time



Name _____

Write the number that comes before:

_____ 8

_____ 25

_____ 10

_____ 22

_____ 6

_____ 13

_____ 11

_____ 30


_____ 15

_____ 28

_____ 19

_____ 17

How many? _____



Name _____



Write the number that comes between:

6 _____ 8

28 _____ 30

15 _____ 17

16 _____ 18

9 _____ 11

14 _____ 16


25 _____ 27

17 _____ 19

22 _____ 24

27 _____ 29

How many? _____



Name _____



Write the number that comes after:

4, 5 _____

27, 28 _____

17, 18 _____

10, 11 _____


19, 20 _____

13, 14 _____

25, 26 _____

21, 22 _____


How many?






Note: Reproduce this form for each student to use with page 6.

Name _____




Plants and Animals

Draw a plant.



Draw an animal.



Circle the correct answer.

- | | | |
|-------------------------------|-----|----|
| 1. Plants are living things. | Yes | No |
| 2. Animals are living things. | Yes | No |
| 3. A box is a living thing. | Yes | No |
| 4. I am a living thing. | Yes | No |